



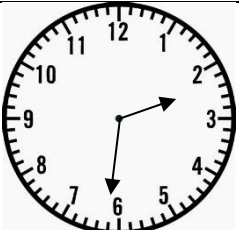
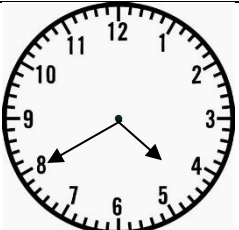
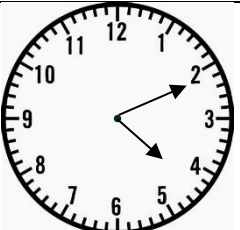
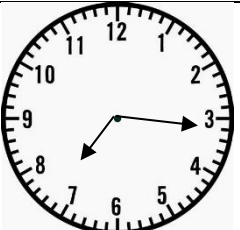


Time

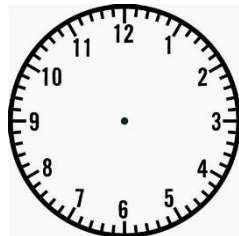
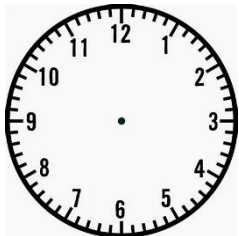
Put the hands on these clocks to make the shown time.

			
6 o'clock	Half past 4	Quarter to 7	Quarter past 9

Write the times shown on these clocks.







Which clock is showing 10 past 5? Explain how you know.



Sid gets to school at 8 o'clock and goes home at 3 o'clock. Sid says he is at school for 5 hours. True or false. Explain your reasoning.

Put these times into order from **earliest to latest**. (all afternoon)

6 o'clock, half past 12, ten to 9, twenty past 3, quarter to 8, 25 past 2

1. 	2. 	3. 
4. 	5. 	6. 

Sammy starts her questions at 11:10.

It takes her 5 minutes per question. She finishes at 11:55.

How many questions did she complete?